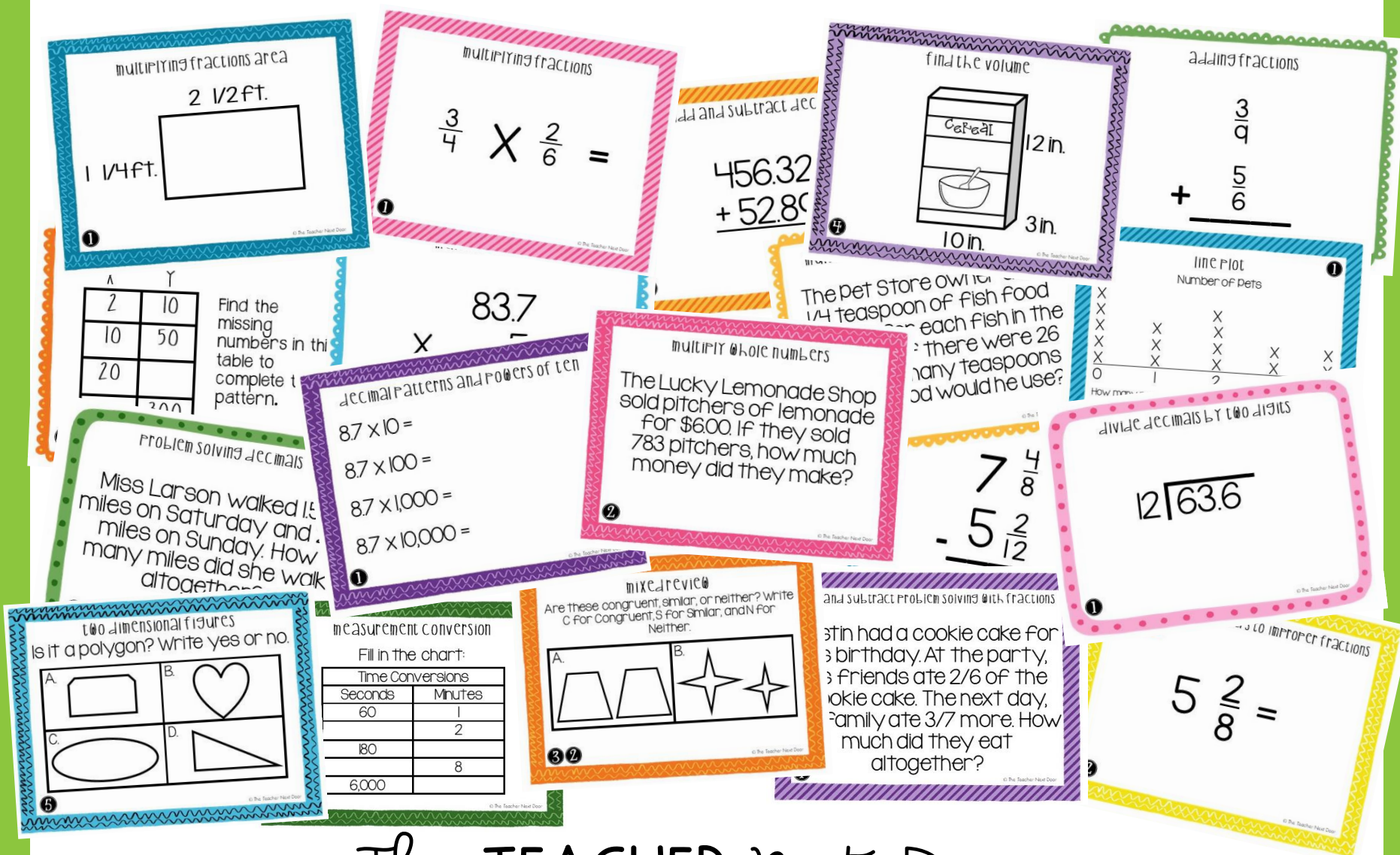


# 5TH GRADE

## ALL STANDARDS BUNDLE

### 960 MATH TASK CARDS







The TEACHER Next Door

# 30 SETS OF 32 TASK CARDS

GIVE YOUR STUDENTS FOCUSED PRACTICE!

two dimensional figures  
Is it a polygon? Write yes or no.

A. 	B. 
C. 	D. 

© The Teacher Next Door

add and subtract decimals

$$\begin{array}{r} 937.65 \\ - 326.87 \\ \hline \end{array}$$

4

read, write, and compare decimals

Write the following number  
in word form:

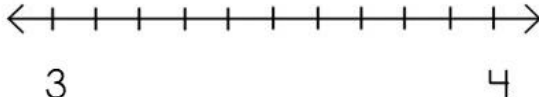
3,704.29

2

rounding decimals

Place the following number on the  
number line. What would that number be,  
rounded to the nearest whole number?

3.6



3 4

2

© The Teacher Next Door

add and subtract problem solving with fractions

Austin had a cookie cake for  
his birthday. At the party,  
his friends ate  $\frac{2}{6}$  of the  
cookie cake. The next day,  
his family ate  $\frac{3}{7}$  more. How  
much did they eat  
altogether?

1

© The Teacher Next Door

Can be used for:

- Whole Class Games
- SCOOT
- Math Centers



# ONE TASK CARD SET FOR EVERY STANDARD!

TIME-SAVING PRACTICE AT YOUR FINGERTIPS!

order of operations

$$4 + (15 \div 3) - (2 \times 2)$$

whole number division

$$4 \overline{) 224}$$

volume problem solving

Grandma was packing an apple pie in a box, so we could take it home. The box measured 10 in. by 10 in. by 3 in. What was the box's volume?

subtracting fractions with regrouping

$$\begin{array}{r} 8\frac{7}{12} \\ - 2\frac{5}{6} \\ \hline \end{array}$$

number patterns

X	Y
2	10
10	50
20	
	300

Find the missing numbers in this table to complete the pattern.

**Perfect for:**

- Partner Practice
- Exit Slips
- Test Prep

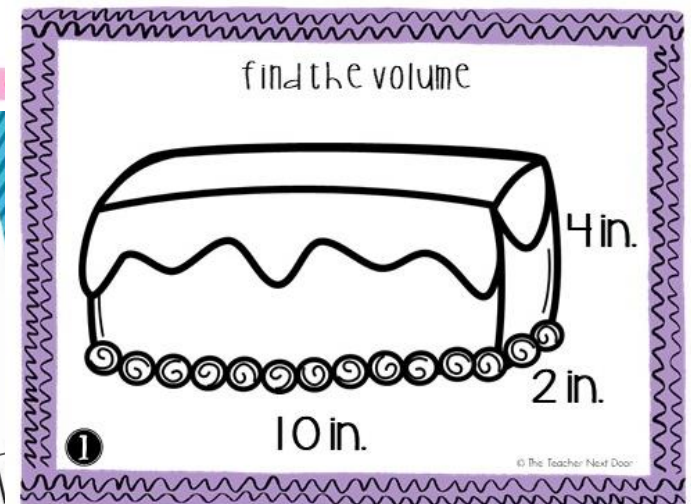
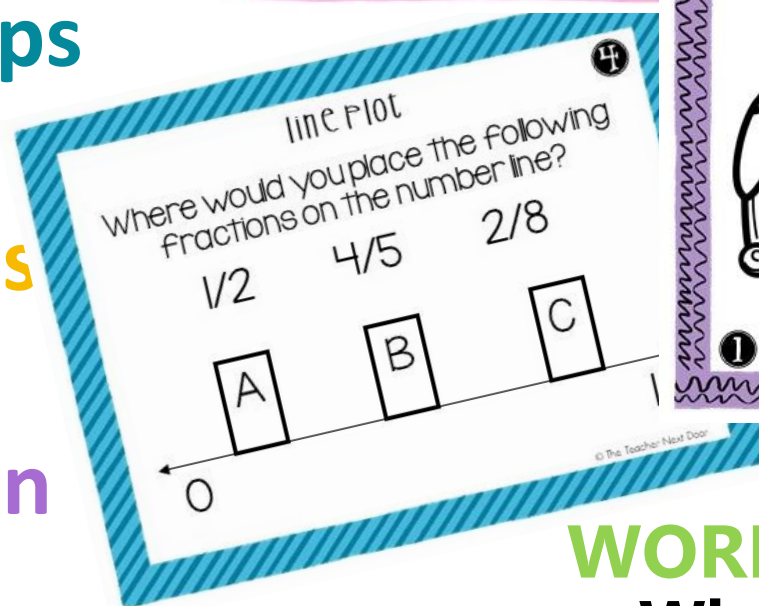
# CAN BE USED IN SO MANY WAYS!

- Math Centers
- Partner Work
- Scavenger Hunt
- SCOOT
- Small Groups
- Exit Slips
- Whole Class Practice
- Intervention
- Review
- Test Prep

divide decimals by two digits

The Oh Happy Day Bakery has 79.2 cups of flour. If it takes 7.2 cups of flour to make a batch of French bread, how many batches can they make?

2



## WORKS WELL FOR:

- Whole Class Games
- Small groups/Partners
- Spiral Review

# TEACHERS ARE SAYING THIS:

What a great purchase!!! I used this to prep for state testing and it was absolutely awesome. I combined it into unit reviews & it worked out perfectly! I love that everything is color coded and so easy & appropriate for common core. One of my all-time favorite purchases!  
(Micah C.)

This is a GREAT resource and a HUGE time-saver for me. Great for sub plans too. (Kirsten L.)

Thank you for creating these task cards. These are a great way to practice skills and the students really enjoy them. I love setting them up around my room and have students travel to solve different problems. (Tony D.)





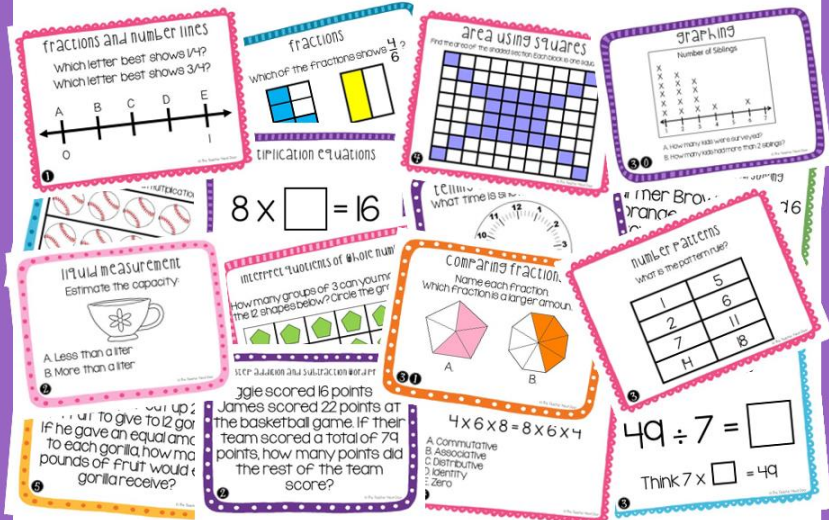
# NEED ANOTHER GRADE?

## A TASK CARD SET FOR EVERY STANDARD!

### 3RD GRADE

#### ALL STANDARDS BUNDLE

#### 960 MATH TASK CARDS



The TEACHER next Door

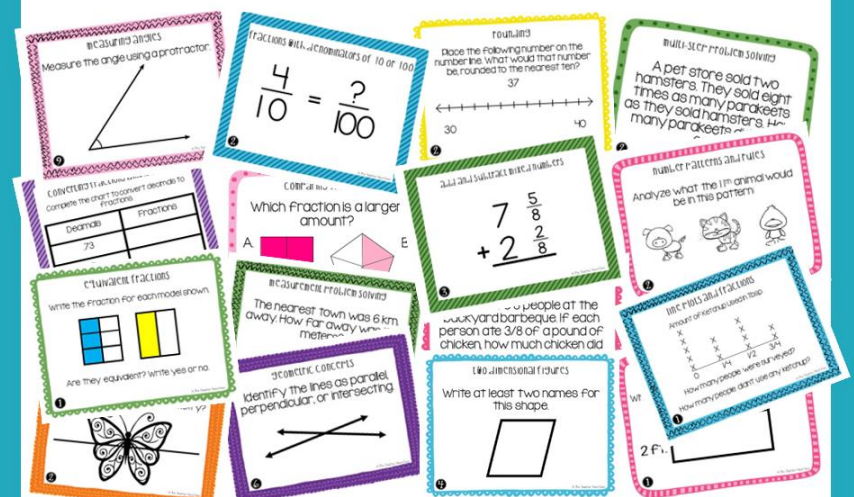
[CLICK HERE](#)

to take a look!

### 4TH GRADE

#### ALL STANDARDS BUNDLE

#### 960 MATH TASK CARDS



The TEACHER next Door

[CLICK HERE](#)

to take a look!

The TEACHER next Door